

Pro termín 23. - 27. listopadu 2020

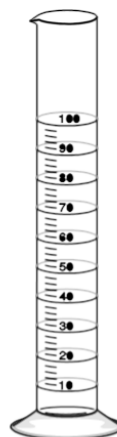

Jméno a příjmení:

Měřidla objemu

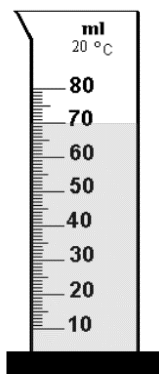
Do sešitu fyziky si zapiš a nakresli:

Měřidla objemu

Odměrný váleček

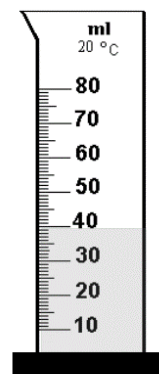


Př: a)



$V = 70 \text{ ml}$

b)

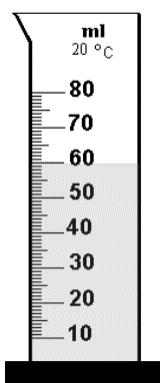


$V = 40 \text{ ml}$




Urči objem kapaliny ve válci:

a)



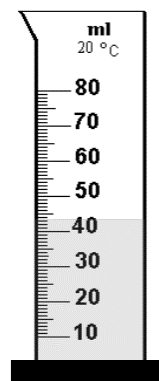
$V =$

b)



$V =$

c)




$V =$




Zakresli objem kapaliny:

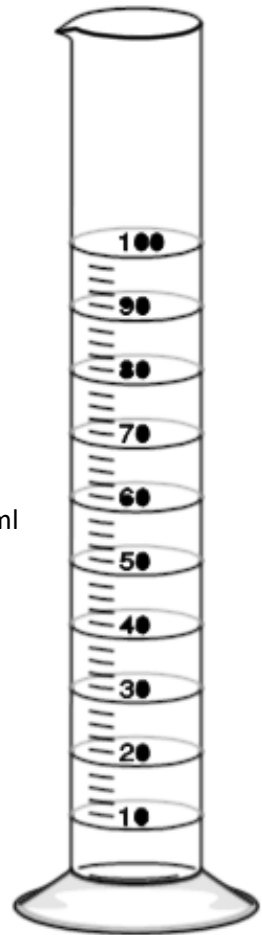
V = 73 ml



V = 29 ml



V = 66 ml



V = 850 ml



V = 1700 ml

